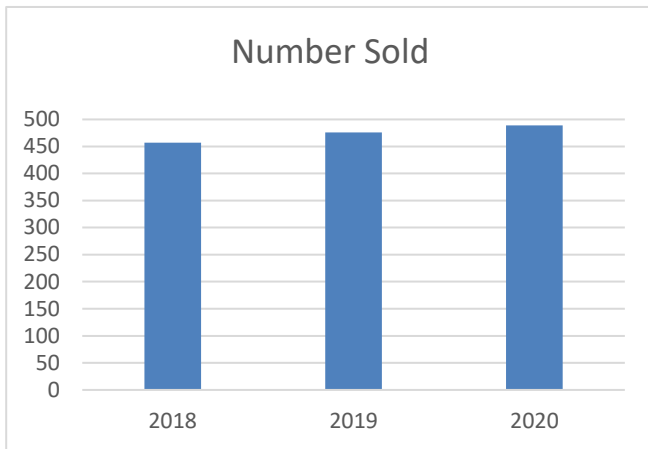
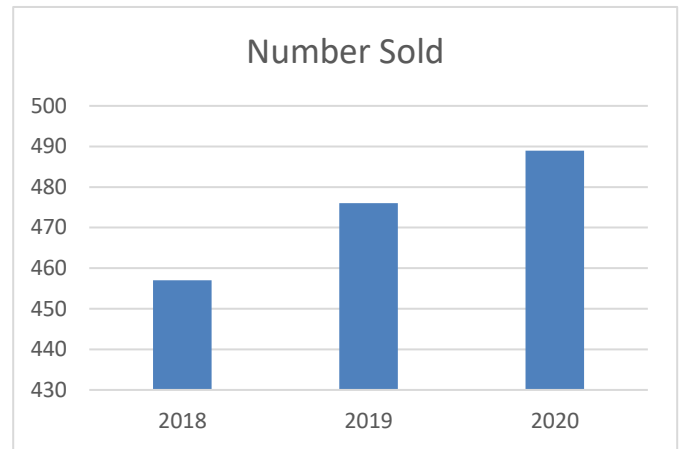


## Section E: Homework

1) The following graphs represent the number of people who purchased a particular item online from Jennifer's Jewelry store during the years 2018, 2019 and 2020. Which graph is misleading? Why?



Graph 1

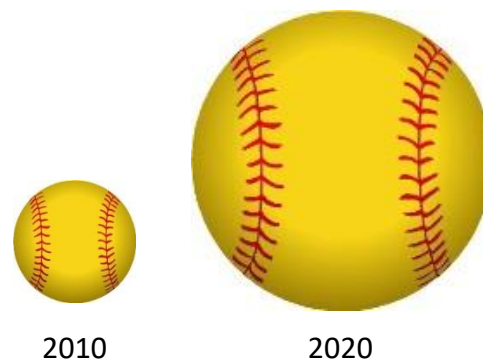


Graph 2

2) The number of girls who played softball in 2020 has **tripled** from the number of girls who played softball in 2010.

a) Does the pictograph below accurately present this information accurately? \_\_\_\_\_

b) Why or why not?



3) Explain why 3-dimensional graphs can be misleading.